

Name: \_\_\_\_\_

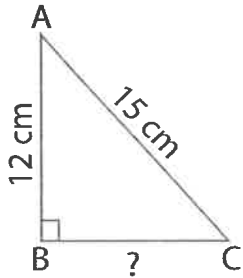
Score: \_\_\_\_\_

## Pythagorean Theorem

Sheet 1

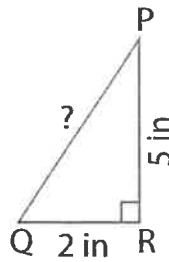
Determine the missing length in each right triangle using the Pythagorean theorem. Round the answer to the nearest tenth.

1)



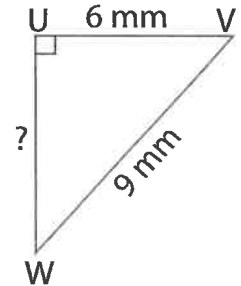
BC = \_\_\_\_\_

2)



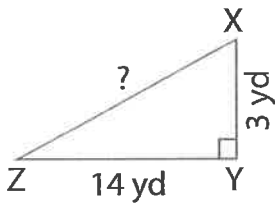
PQ = \_\_\_\_\_

3)



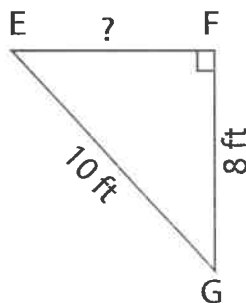
UW = \_\_\_\_\_

4)



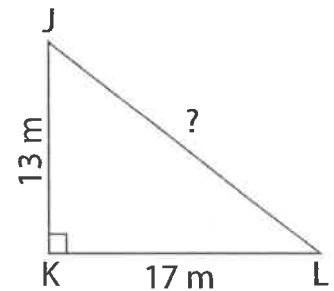
XZ = \_\_\_\_\_

5)



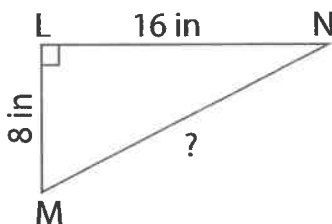
EF = \_\_\_\_\_

6)



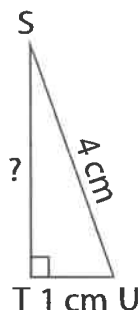
JL = \_\_\_\_\_

7)



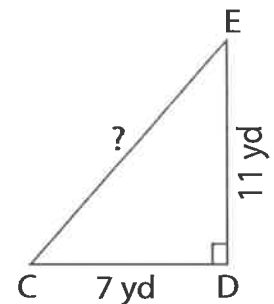
MN = \_\_\_\_\_

8)



ST = \_\_\_\_\_

9)



CE = \_\_\_\_\_