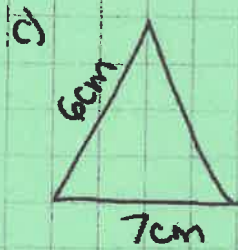
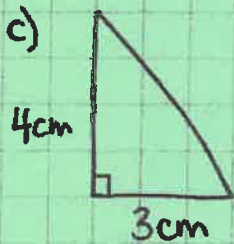
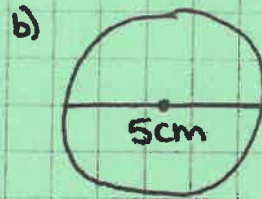



Intro to 1.4

* Use 3.14 as the value of π (don't use the calculator π button)

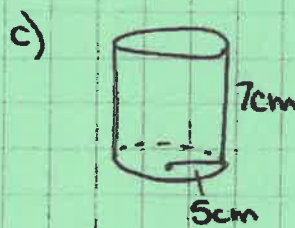
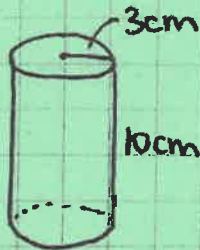
1) Find the area of the following shapes.



2) a) What is the circumference of the following circle?



b) Find the surface area of these cylinders



3) Calculate the surface area of the following triangular prisms.

